









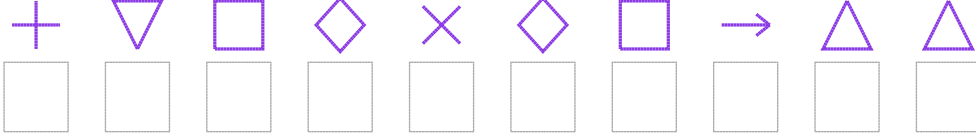


# Şekil Sayı Eşleştirme

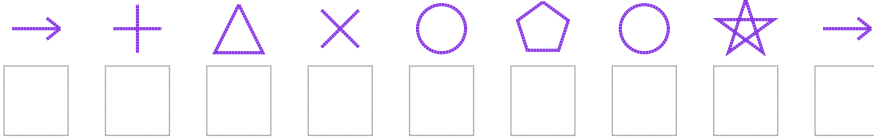
 = 4	 = 7	 = 2	 = 9	 = 8	 = 5	 = 6	 = 3	 = 1	 = 0
--	--	--	--	--	--	---	--	--	--

Aşağıdaki uzun şifreleri hatasız çözerek altlarına yazın:

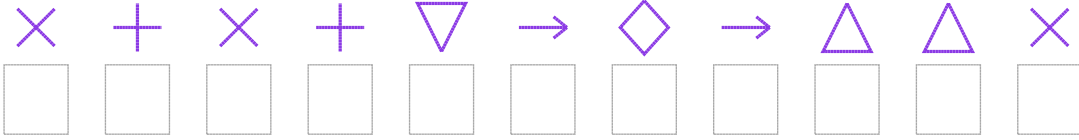
1. Şifre



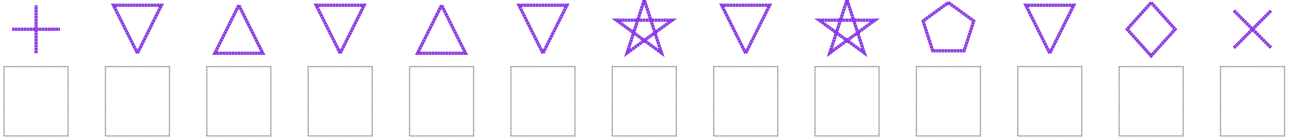
2. Şifre



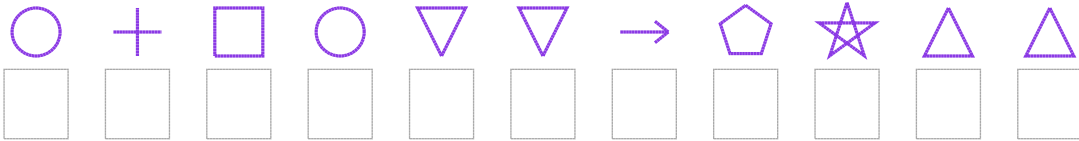
3. Şifre



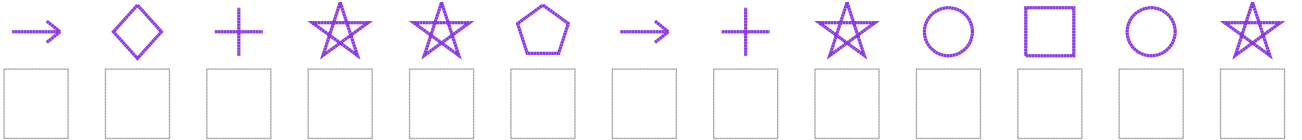
4. Şifre



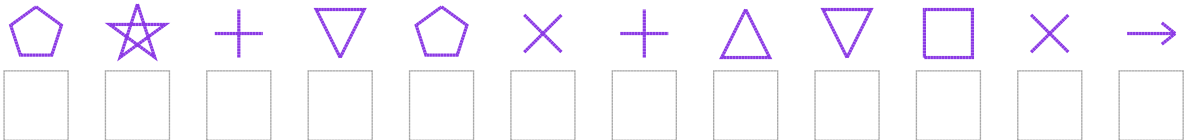
5. Şifre



6. Şifre



7. Şifre



❑ BONUS: 2. ve 1. şifrenin ikinci rakamının toplamı kaçtır? .....

## Cevap Anahtarı

1. Şifre: 9160306877
2. Şifre: 897325248
3. Şifre: 39391808773
4. Şifre: 9171714145103
5. Şifre: 29621185477
6. Şifre: 8094458942624
7. Şifre: 549153971638

□ Bonus Soru Cevabı: 10